

Name : _____

Score : _____

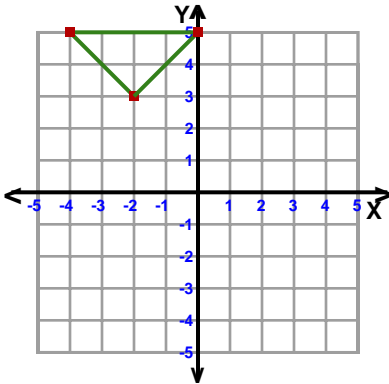
Teacher : _____

Date : _____

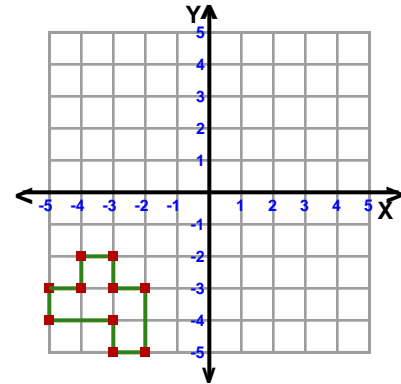
Transformations

ccw = counterclockwise

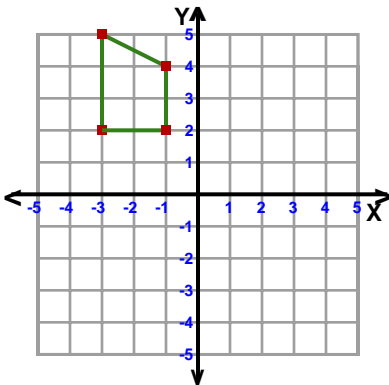
- 1) Rotation: 180° about the origin



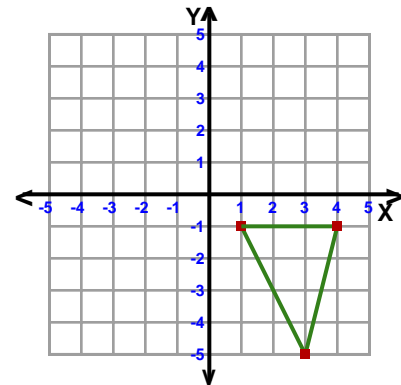
- 2) Reflection: Across the y-axis



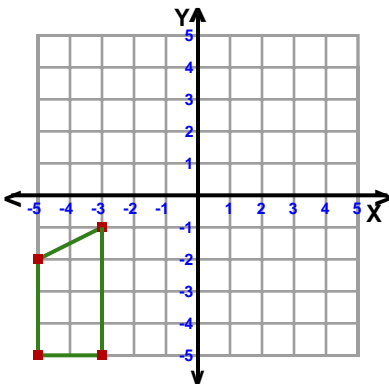
- 3) Translation: 2 right and 3 down



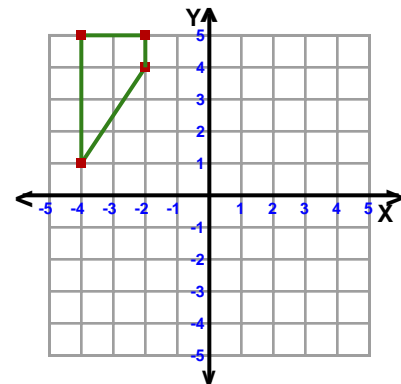
- 4) Reflection: Across Line $y = -x$



- 5) Translation: 4 right and 4 up



- 6) Rotation: 90° clockwise about the origin



Name : _____

Score : _____

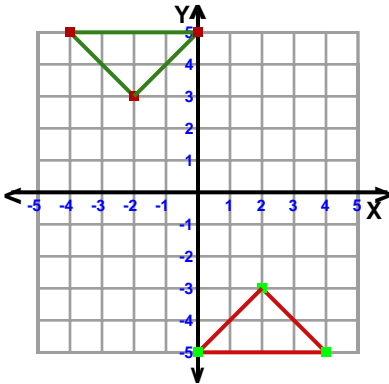
Teacher : _____

Date : _____

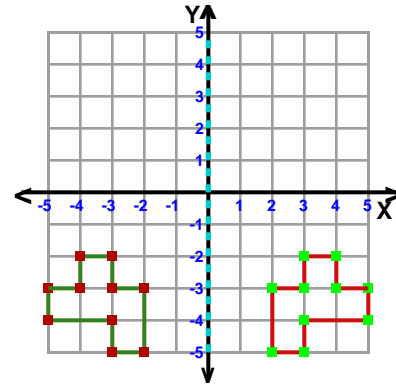
Transformations

ccw = counterclockwise

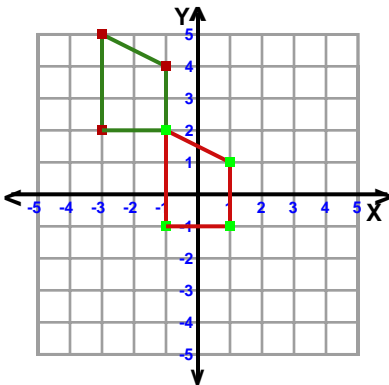
- 1) Rotation: 180° about the origin



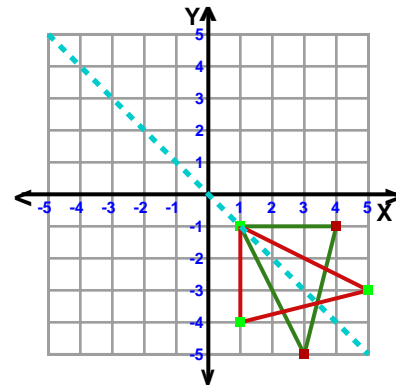
- 2) Reflection: Across the y-axis



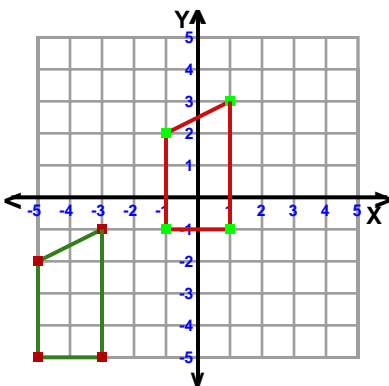
- 3) Translation: 2 right and 3 down



- 4) Reflection: Across Line $y = -x$



- 5) Translation: 4 right and 4 up



- 6) Rotation: 90° clockwise about the origin

